


**White**

**Rose  
Maths**

Year 1 - Spring - Block 3

**Length & Height**

Rosie, Alex and Mo are comparing the height of Mrs Rose and Jack.



Rosie

Mrs Rose is tall than  
Jack.



Alex

Jack is short than Mrs  
Rose.




Mo

Mrs Rose is longer than  
Jack.

Can you improve their sentences to make them more accurate?

Eva thinks the pencils are the same length.




How can Eva check if she is correct?

Using classroom equipment, can you find an object which is longer than your rubber but shorter than your pencil?

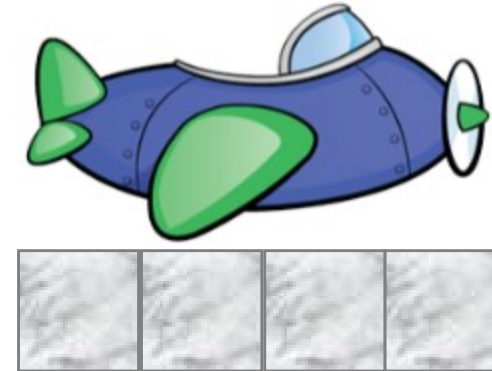
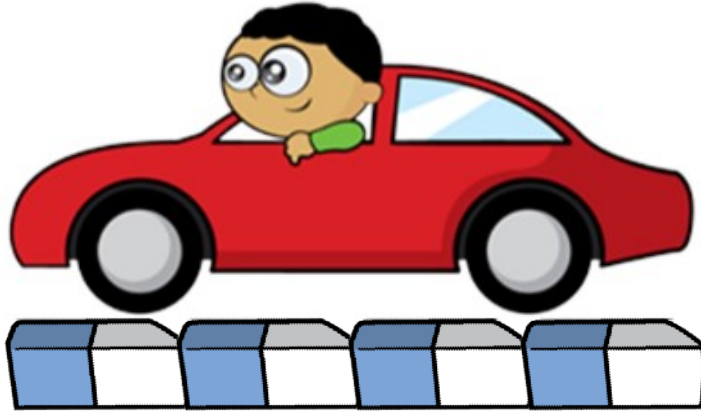
Can you find a friend who is shorter than you but taller than your other friend?

# True or false?



The flower is 8 cubes tall.  
Explain your answer.

Whitney measures the length of two toys.



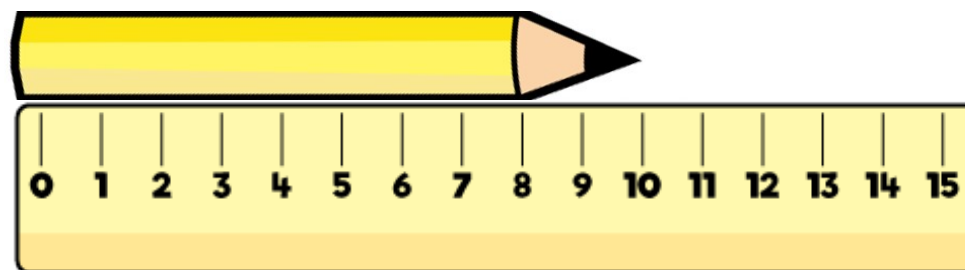
She says,



The toys are the same length.

Do you agree with Whitney?  
Explain your answer.

Teddy measures the length of the pencil.



He says,



The length of the pencil is 10 cm.

Do you agree with Teddy?  
Explain why.

Eva, Dexter and Rosie are comparing ribbons that they have.

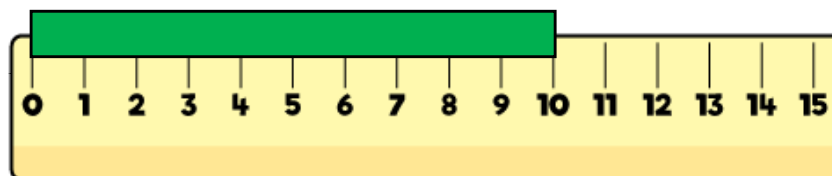
Unfortunately, Dexter has lost his ribbon.

He says,

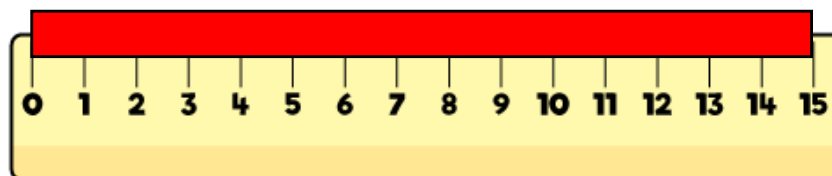


My ribbon is shorter than Rosie's, but longer than Eva's.

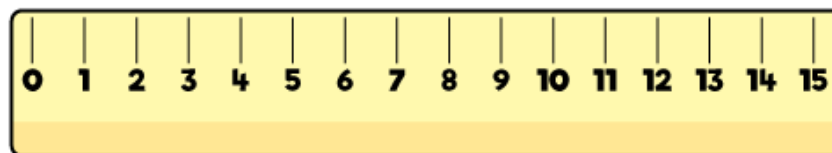
Eva



Rosie



Dexter



How long could Dexter's ribbon be?